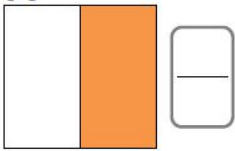
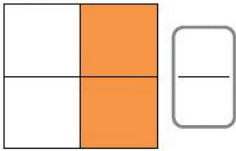
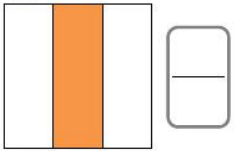


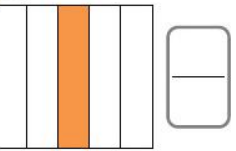
NOME: _____ DATA: ____/____/____

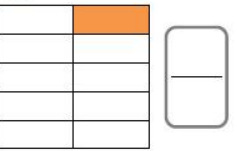
1. *Escreva* a fração de cada bolacha, considerando as partes pintadas.

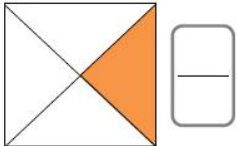
A 


B 

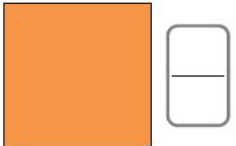
C 

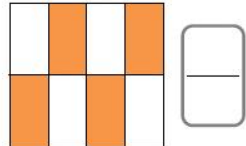
D 

E 

F 

G 

H 

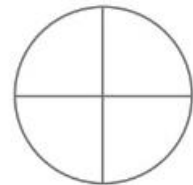
I 

2. *Escreva* as frações a que correspondem as frases e depois *pinta* a parte que lhe corresponde.

a) O denominador é **5**. O numerador é **3**. Fração: _____



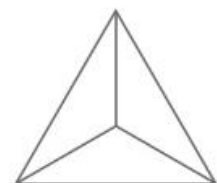
b) O numerador é **3**. O denominador é **4**. Fração: _____



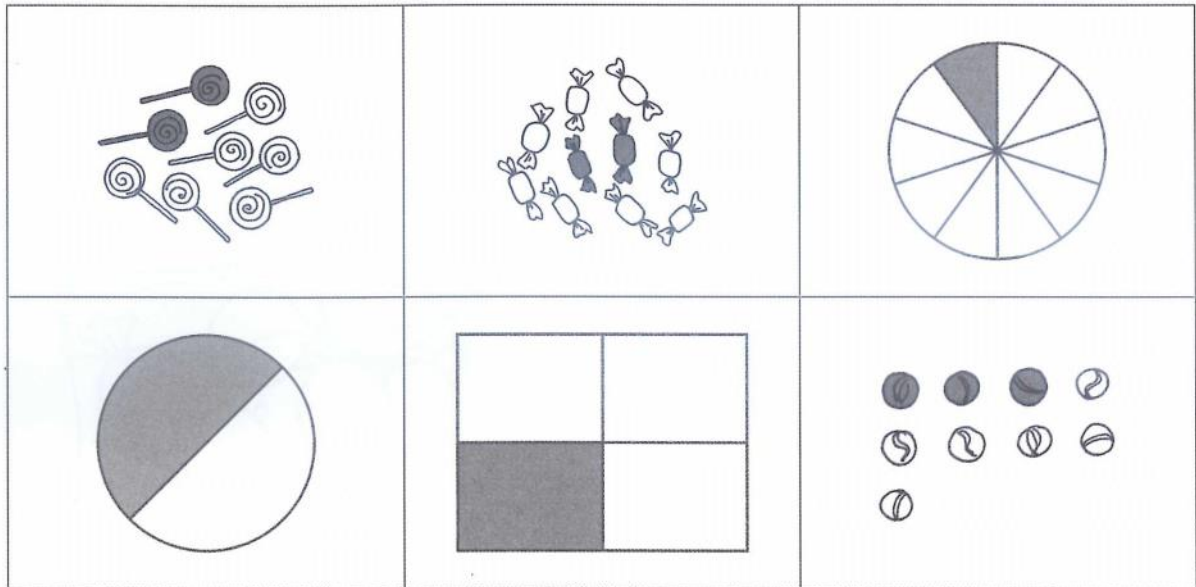
c) O numerador é **9**. O denominador é **10**. Fração: _____



d) O denominador é **3**. O numerador é **2**. Fração: _____




3. **Escreva** junto a cada figura $\frac{1}{2}$, $\frac{1}{3}$, $\frac{1}{4}$, $\frac{1}{5}$ ou $\frac{1}{10}$ que corresponde à parte pintada.




4. **Desenha** e pinta figuras que correspondam às frações.


$$\frac{1}{3}$$




$$\frac{2}{4}$$




$$\frac{3}{5}$$



$$\frac{2}{8}$$



$$\frac{3}{10}$$



$$\frac{4}{16}$$

